

MADINAH ISLAMIC JUNIOR SCH, NSANGI
RECESS WORK TERM I 2020
PRIMARY THREE LITERACY I

Name: _____

1. In which division is your school?

2. Give one example of a physical feature in your area.

3. Name one symbol of a school.

4. State one animal that lives in water.

5. Name the sense organ that lives in water.

6. Which language is spoken by the Baganda tribe?

7. Name any one thing used to clean our bodies?

8. Write the biggest lake in Uganda.

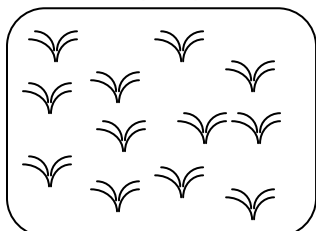
9. Draw the map of a tree.



10. Which language is commonly spoken in sub-county/division?

11. What are physical features?

12. Identify the map symbol drawn below.



13. Name one domestic animal.

14. Mention any one element of a good map.

15. What is the commonest type of transport?

16. Who is believed to be the first Muganda ?

17. Identify one group of people who use the compass when doing work.

18. Write any one crop grown in the swamps.

19. Write any one duty of a child at home.

20. Write down any one dangerous insect.

21. Identify one way of caring for plants.


22. Mention one thing found in the first aid box.

23. Mention the bird found in the middle of the Uganda flag.

24. Name the garden tool drawn below.



25. Draw the picture of a house in the space below.



26. Give one example of a wild animal.


27. Name one animal that gives us milk?

28. Where do we go to learn?

29. Write the main natural source of light?

30. Write your school motto?

31. Name the physical feature marked "p".



P _____

32. What do we call the young one of a goat?

33. Which instrument is used to show directions of places?

34. Mention one item used to brush our teeth.

35. In which type of weather do farmers clear land?

36. State one characteristic of living things.

37. Write down any one use of lakes to people in your area.

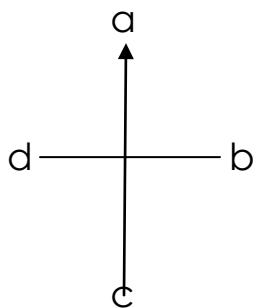
38. From which lake do we get salt.

39. Write any one insect that people eat.

40. Write any one thing made out of clay.

SECTION B

41. Name the cardinal points of a compass.



a _____
b _____
c _____
d _____

42. Write the language spoken by the following tribes

- a) Baganda _____
- b) Basoga _____
- c) Batooro _____
- d) Iteso _____

43. How do we call the representation of an object as seen and drawn from above?

b) Draw these map symbols.

Swamp	Bridge	Mountain

44. Who is a child?

b) Write three children rights.


- i. _____
- ii. _____
- iii. _____

45. Name one lake which provides salt to people.

b) Identify the biggest lake in Uganda.

c) Identify the building material got from lakes.

d) Draw a map symbol of the lake.



46. Write down four important people in the community.

- i. _____
- ii. _____
- iii. _____
- iv. _____

47. Write the following in full.

- a. Sch _____
- b. Lc _____
- c. Mt _____
- d. B.o.u _____

48. Match people and their roles

Teacher	Flies earoplanes
Doctor	Treats our teeth
Pilot	Teaches children
Dentist	Treats sick people

49. Mention four elements of a good map.

- I. _____
- II. _____
- III. _____
- IV. _____

50. Outline four groups of people who uses a compass.

- I. _____
- II. _____
- III. _____
- IV. _____

51. Write two sources of water.

- I. _____
- II. _____




b) State two uses of water to man.

- i. _____
- ii. _____

52. List four types of transport

- | | |
|-----------|------------|
| i. _____ | iii. _____ |
| ii. _____ | iv. _____ |

53. Draw the following garden tools.

Hoe	Axe	Watering can
		

b) Which garden tool do we use for watering plants?

54. What are physical features?

b) List down three examples of physical features.

- I. _____
- II. _____
- III. _____

55. Define the term living things.

b) Mention three things which have life.

i.

ii.

iii.
